
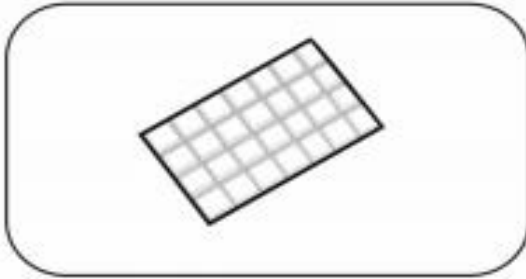
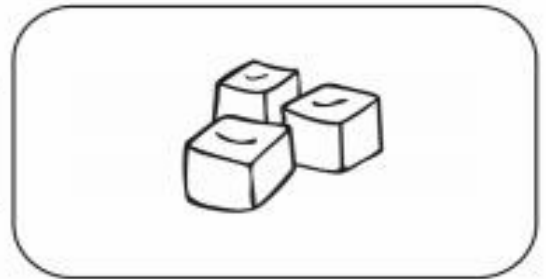


reversible \longleftrightarrow
irreversible \rightarrow


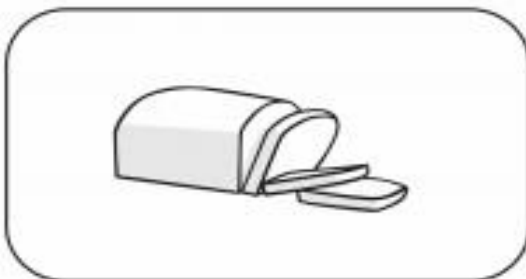
Using the key above draw the correct arrow between the pictures.
Write whether each change is a *reversible* or an *irreversible*.



Melting chocolate is _____ change.



Freezing water is _____ change.



Toasting bread is _____ change.

Can you think of any more reversible and irreversible changes?